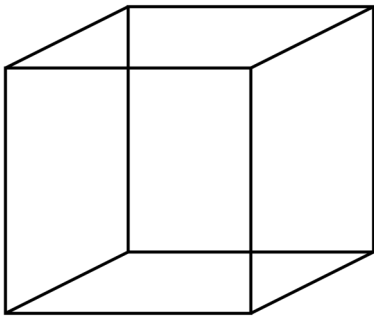


Activity 14

L.1—to know properties of 3D shapes.

Properties of 3D shape


Write the properties of the shapes.



A cube has _____ straight sides

A cube has curved sides


A cube has _____ corners.



A cylinder has _____ straight sides

A cylinder has curved sides

A cylinder has _____ corners.



A sphere has _____ straight sides

A sphere has curved sides

A sphere has _____ cor-