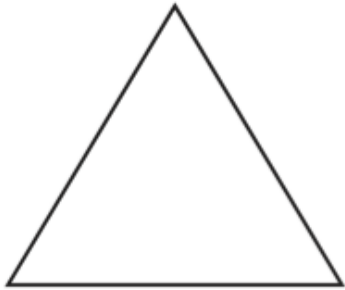


Name

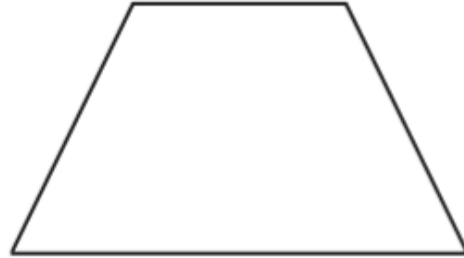
Date

L1 - To identify the properties of 2D shapes




Number of sides _____

Name _____



Number of sides _____

Name _____



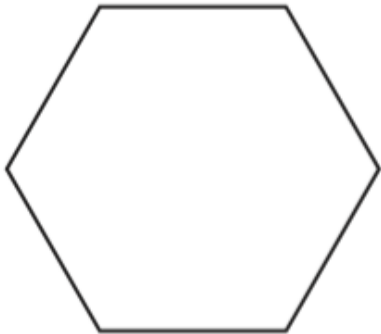
Number of sides _____

Name _____



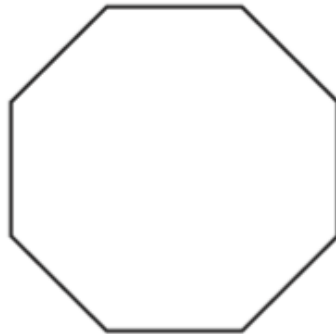
Number of sides _____

Name _____



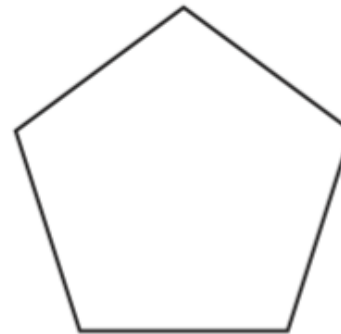
Number of sides _____

Name _____




Number of sides _____

Name _____



Number of sides _____


Name _____



Number of sides _____

Name _____

2D Shape Word Mat




circle



rectangle



triangle




oval



octagon



square



heptagon



rhombus



pentagon



hexagon



kite