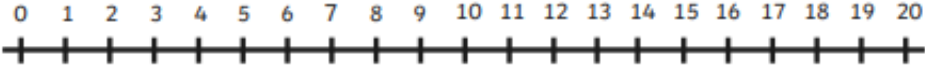
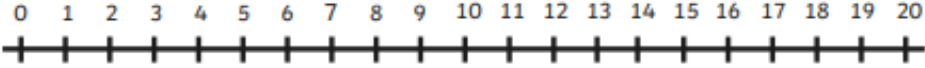
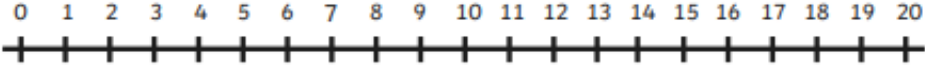
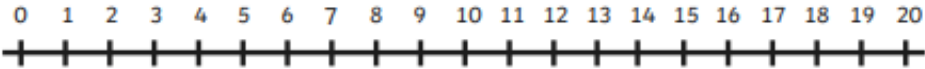
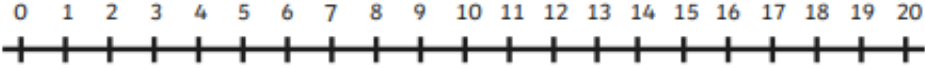
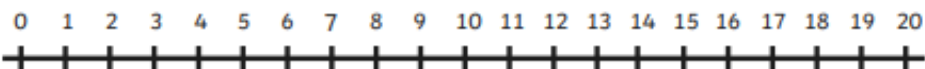
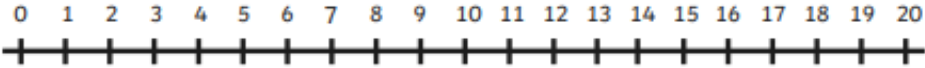
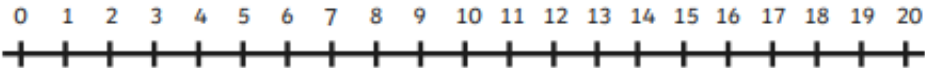
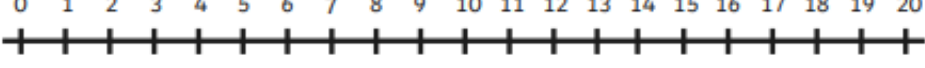
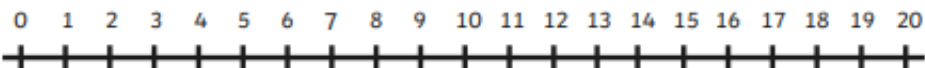


Name .....

Date .....

L1 - To count back to complete subtraction sums

$20 - 17 =$	 <p>A horizontal number line with tick marks and labels from 0 to 20.</p>
$12 - 4 =$	 <p>A horizontal number line with tick marks and labels from 0 to 20.</p>
$18 - 12 =$	 <p>A horizontal number line with tick marks and labels from 0 to 20.</p>
$10 - 3 =$	 <p>A horizontal number line with tick marks and labels from 0 to 20.</p>
$17 - 5 =$	 <p>A horizontal number line with tick marks and labels from 0 to 20.</p>
$12 - 2 =$	 <p>A horizontal number line with tick marks and labels from 0 to 20.</p>
$3 - 2 =$	 <p>A horizontal number line with tick marks and labels from 0 to 20.</p>
$20 - 8 =$	 <p>A horizontal number line with tick marks and labels from 0 to 20.</p>
$15 - 3 =$	 <p>A horizontal number line with tick marks and labels from 0 to 20.</p>
$19 - 11 =$	 <p>A horizontal number line with tick marks and labels from 0 to 20.</p>